

April 20, 2020

Dear Parents/Guardians

Please use these materials to support your student during this time of school closure. If you haven't already, **please sign up for Class Dojo**. Please have your child read for 20 minutes and complete a reading fluency practice page daily. If you have access to technology, we recommend 30 minutes for reading and 30 minutes for math on EdGenuity:

<https://www.thelearningodyssey.com/> and another 30 minutes on Raz Kids: <https://www.raz-kids.com/>

We can do this. The First Grade TEAM

Monique.Baldwin@saltriversschools.org

Amelia.Carlos@saltriversschools.org

Ramona.Gonzales@saltriversschools.org

Sara.Marcum@saltriversschools.org

ELA and Math Schedule for the Weeks of: May 11th and May 18th, 2020

Monday	Tuesday	Wednesday	Thursday	Friday
<p>Standard: 1.MD.8 Work with time and money. *Identify coins by name and value. Solve for value of coin sets.</p> <p>Standard: 1.L.5 Identify synonyms and antonyms * Word relationships: Say a word and give a synonym (word with same meaning).</p>	<p>Standard: 1.G.A Reason with shapes and their attributes *Partition shapes into two and four equal shares, describe the shares using the words halves, fourths, and quarters.</p> <p>Standard: 1.L.4; 1.WF.3 Identify frequently occurring root words (verbs) and their inflectional forms (e.g., helps, helped, helping). *Write root words, then add suffixes to change the words. (walk, play, look)</p>	<p>Standard: 1.G.A Reason with shapes and their attributes *Distinguish defining attributes of 3 dimensional (solid) shapes. Count faces (flat sides) and vertices (corners).</p> <p>Standard: 1.RL.3; 1.RL.7 Describe characters, settings, and major events in a story, using key details. *Use illustrations and details to describe major events.</p>	<p>Standard: 1.MD.C Represent and interpret data. * Organize and interpret data by sorting a set of toys into a graph and discuss.</p> <p>Standard: 1.W.1; 1.WF.1; 1.RF.1 Write opinion. *Introduce topic, state opinion (I think or I feel...) and reasons (because). Write in notebook using correct capitalization and punctuation.</p>	<p>Standard: 1.NBT.A.1 Count to 120 by 1's, 2's, and 10's starting at any number less than 100 forward and backward. Read and write numerals. *Skip count by 2's. (start at 1 for odd numbers, start at 2 for even numbers.). May use number chart. Write on number page.</p> <p>Standard: 1.RL.10; 1.RF.4 With prompting and support, read stories, drama, and poetry. *Read with a family member, independently, or listen to an online book. Listen for the verbs (action words).</p>
Monday	Tuesday	Wednesday	Thursday	Friday
<p>Standard: 1.NBT.A.1 Count to 120 by 1's, 2's, and 10's starting at any number less than 100 forward and backward. Read and write numerals. *Pick a number, tell or write the number 1 less, 1 more, 10 less, 10 more.</p> <p>Standard: 1.L.5 Identify synonyms and antonyms * Word relationships: Say a word and give an antonym (word with opposite meaning).</p>	<p>Standard: 1.MD.8 Work with time and money. *Tell and write time in hours and half-hours using analog and digital clocks.</p> <p>Standard: 1.RL.5 Explain differences between books that tell stories (narratives) and books that give information. * Use a T chart to list attributes for each</p>	<p>Standard: 1.OA.C.6 *Fluently add and subtract within 10 *Use the addition/subtraction problems to practice your fluency.</p> <p>Standard: 1.RI.10; 1L.1 With prompting and support, read informational text. *Reading for information. Read with a family member, independently, or listen to an online book. Listen for the nouns (person, place, things/animals).</p>	<p>Standard: 1.MD.A Measurement * Order 3 or more objects by length. Use common units (paperclips or crayons) to measure items.</p> <p>Standard: 1.W.2; 1.WF.1 Write information piece on topic with facts and closure. *Select a topic, Research (online, book or interview). Write in journal.</p>	<p>Standard: 1.OA.A Represent and solve addition and subtraction problems. *Solve word problems with three whole numbers whose sum is less than or equal to 20 (ie. 2+?=6=16; missing number is 8)</p> <p>Standard: 1.WF.3 Know and apply phonics. *Read using toughy chart. To make it fun, you can roll the dice and read the line indicated on the dice.</p>

Packets and announcements https://sres.srpmic-ed.org/s_r_e_s_news/announcements/homework032020

Online Learning Resources https://saltriversschools.org/news/what_s_new/learningresources2020


- 1 Write the first month of the year on the line.

- 2 Write the numbers in order from greatest to least.

74 46 51

- 3 $4 + 9 + 5 =$ ____

- 4 Circle the heaviest item.



- 5 You buy a dozen eggs. You use 4 of the eggs. How many eggs do you have left?

_____ eggs

- 6 Draw a line from each word to its synonym.

tidy •	• clean
kind •	• little
small •	• nice

- 7 Mark the correct punctuation for the sentence.

We take the bus to school ____

(A) . (B) ? (C) !

- 8 Mark the sight word that completes the sentence.

Kate ____ like to go for a walk.

(A) went (B) goes (C) would

- 9 Mark the sentence that is written with correct capitalization.

(A) We went to the mall of America.
(B) We went to the Mall of America.
(C) we went to the Mall of America.

- 10 Rewrite the sentence with correct capitalization, spelling and punctuation.
Stacy lives on Main street?

- 1 Write how much money in all.



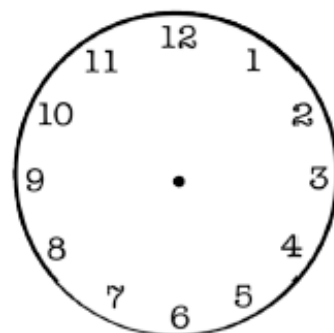
- 2 What is the fraction for the shaded part?



- (A) $\frac{1}{3}$ (B) $\frac{1}{4}$ (C) $\frac{3}{4}$

- 3 $9 + 4 =$ ____ $15 - 7 =$ ____

- 4 Shane leaves for school at 7:30. It takes 30 minutes to get to school. Draw the clock hands to show the time Shane will arrive to school.



- 5 What's the missing number?

$$13 = \boxed{} + 6$$

- 6 Draw a line from each word to its synonym.

big •	• glad
happy •	• yell
shout •	• large

- 8 Mark the sight word that completes the sentence.

____ are going on a field trip.

- (A) They (B) I (C) He

- 7 Mark the correct punctuation for the sentence.

What is the date today ____

- (A) . (B) ? (C) !

- 9 Mark the set of words that are in ABC order.

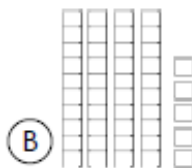
- (A) green, blue, red, yellow
(B) blue, green, yellow, red
(C) blue, green, red, yellow

- 10 Rewrite the sentence with correct capitalization, spelling and punctuation.
como Zoo has lots of animals

- 1 An object that is divided into thirds has ____ equal parts.

(A) 2 (B) 3 (C) 4

- 2 Which set is less?



- 3
$$\begin{array}{r} 14 \\ - 6 \\ \hline \end{array}$$

$$\begin{array}{r} 16 \\ + 4 \\ \hline \end{array}$$

$$\begin{array}{r} 17 \\ - 8 \\ \hline \end{array}$$

- 4 Find the pattern. Write the missing numbers.

31 ____ 29 ____ 27 26 ____

- 5 Belinda has 18¢. She spends 6¢ at the store. How much money does she have left?



- 6 Read the sentence. Mark the synonym for the underlined word.

The girls had a fantastic day.

(A) bad (B) great (C) slow

- 8 Mark the sight word that completes the sentence.

Joe needs to ____ his bed.

(A) eat (B) make (C) walk

- 7 Mark the correct punctuation for the sentence.

Hurray, we won the game ____

(A) . (B) ? (C) !

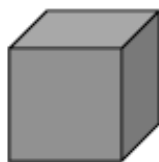
- 9 Mark the correctly spelled word to complete the sentence.

Do you ____ my pencil?

(A) hav (B) have (C) hove

- 10 Rewrite the sentence with correct capitalization, spelling and punctuation.
will you go with josh?

- 1 Write the number of flat surfaces and vertices for the solid figure.



____ flat surfaces


____ vertices

- 2 Omar has 6 toy cars. Pang has 8 toy cars. How many more toy cars does Pang have than Omar?

____ toy cars

- 3 $8 - 5 = \underline{\quad}$ $6 + 5 = \underline{\quad}$

- 4 Jim sees 4 lions, 7 monkeys and 2 seals at the zoo. Fill in the bar graph to show the number of animals he sees.



- 5 Write >, < or = in the circle.

2 cups ○ 1 pint

- 6 Read the sentence. Mark the synonym for the underlined word.

Shut the door when you leave.

(A) Open (B) Have (C) Close

- 8 Mark the sight word that completes the sentence.

Keira will ____ the dog a bone.

(A) giving (B) take (C) give

- 7 Mark the correct punctuation for the sentence.

How tall is your dad ____

(A) . (B) ? (C) !

- 9 Mark the verb in the sentence.

The bee flies back to its hive.

(A) flies (B) hive (C) bee

- 10 Rewrite the sentence with correct capitalization, spelling and punctuation.

Nat needs two cup


- 1 Grace has 4 dimes, 2 nickels and 3 pennies in her pocket. How much money does she have in all?

- 2 Write the time.



- 3
- | | | |
|-------|-------|-------|
| 15 | 12 | 5 |
| - 9 | - 4 | + 6 |
| _____ | _____ | _____ |

- 4 How many counters do the ten-frames show?



_____ counters

circle one: odd even

- 5 Circle the seventh letter.

A B C D E F G H I J

Read the passage. Answer the questions.

Frog Looks and Looks

Frog is sad because he lost his glasses. He looks under his bed. He looks in his desk. He looks everywhere but can't find them anywhere. Frog gets really tired and decides to go to bed. He goes to the bathroom to brush his teeth. He looks at himself in the mirror and laughs. His glasses are on top of his head!

- 6 Where does this story take place?
- (A) in the garden
(B) in the classroom
(C) in Frog's home
- 7 Why is Frog sad?
- (A) He can't find his glasses.
(B) He reads a sad book.
(C) He is really tired.
- 8 What does Frog do last?
- (A) brushes his teeth
(B) looks under his bed
(C) watches TV
- 9 Where does Frog find his glasses?
- (A) under his bed
(B) in his desk
(C) on top of his head
- 10 How do you know this story is fantasy?
- (A) The story is about a frog.
(B) Frog brushes his teeth.
(C) Frogs are animals.

- 1 Circle all the names for 9.

17 - 8 5 + 6 9 - 1 5 + 4

- 2 Finish the pattern.

1 3 7 1 3 7 1 _____

3	10
6	3
+ 8	+ 7
_____	_____

- 4 Which set shows 38¢?



- 5 Write 10 less than 49: _____

- 6 Draw a line from each word to its antonym.

young •	• cool
warm •	• over
under •	• old

- 7 Mark the word that goes with the picture.



(A) apple (B) apples

- 8 Mark the sight word that completes the sentence.

____ are we going for lunch?

(A) Were (B) Went (C) Where

- 9 Mark the sentence that is written with correct capitalization.

(A) School begins in September.
(B) school begins in September.
(C) School begins in september.

- 10 Rewrite the sentence with correct capitalization, spelling and punctuation.
the Car is blue.

- 1 Chris picks 23 red apples and 9 green apples. How many apples does he pick in all?

_____ apples

- 2 Write >, < or = in the circle.

15 - 9 ○ 11 - 3

- 3 80 - 30 = ____ 50 - 20 = ____

30 + 10 = ____ 40 + 30 = ____

- 4 Jude goes for a run at 5:00. If he runs for 30 minutes, what time will he be done?



- 5 Approximately how long is the line below?



- (A) an inch long
(B) shorter than an inch
(C) longer than an inch

- 6 Draw a line from each word to its antonym.

first •	• dirty
clean •	• last
wide •	• narrow

- 7 Mark the word that goes with the picture.



- (A) muffin (B) muffins

- 8 Mark the sight word that completes the sentence.

The ____ of us will play together.

- (A) for (B) four (C) from

- 9 Who is the author of the book?



- (A) Back to School
(B) Tom Jones

- 10 Rewrite the sentence with correct capitalization, spelling and punctuation.

The dogs barks at the cat

- 1 Mark the group the has $\frac{1}{4}$ shaded.



- 2 I more than 50 is ____.

I less than 50 is ____.

3

48	57	83
+ 3	+ 10	+ 6
_____	_____	_____

- 4 Each carton has 10 juice boxes. If you buy 6 cartons, how many juice boxes will you have?

_____ juice boxes

- 5 Find the pattern.
Write the missing numbers.

30 35 ____ 45 ____ 55 60

____ 24 26 28 ____ 32 34

- 6 Read the sentence. Mark the antonym for the underlined word.

Talk to me before class.

- (A) while (B) after (C) in

- 7 Mark the word that goes with the picture.



- (A) leafs (B) leaves

- 8 Mark the sight word that completes the sentence.

I can't ____ my backpack.

- (A) find (B) found (C) look

- 9 Choose the picture that tells the main idea of the story.



- (A) Skippy is a dog.
(B) Skippy is sitting by his doghouse.
(C) Skippy barks.

- 10 Rewrite the sentence with correct capitalization, spelling and punctuation.
why are you crying

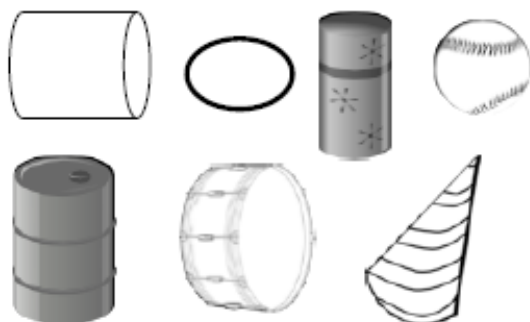
- 1 How many quarters do you need to show \$1.00?

_____ quarters

- 4 Write how much money in all.



- 2 Circle all the cylinders.



- 5 Edison bakes 14 cupcakes. His family eats 5 of them. How many cupcakes are left?

_____ cupcakes

- 3 $13 - 7 =$ ____ $20 - 2 =$ ____

- 6 Read the sentence. Mark the antonym for the underlined word.

The sky is getting dark.

- (A) light (B) black (C) good

- 8 Mark the sight word that completes the sentence.

My mom ____ to be careful.

- (A) say (B) sad (C) said

- 7 Mark the word that goes with the picture.



- (A) spoon (B) spoons

- 9 Mark the noun in the sentence.

The squirrels ran away.

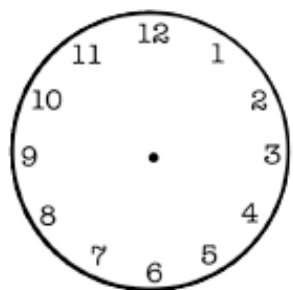
- (A) squirrels (B) away (C) ran

- 10 Rewrite the sentence with correct capitalization, spelling and punctuation.
do you need help.

- 1 Circle all the even numbers.

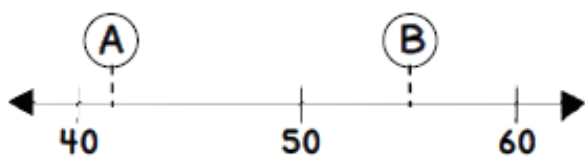
84 79 47 36 50

- 2 You eat lunch at noon. Draw the clock hands to show the time you eat lunch.



- 3 $9 + 4 =$ ____ $12 - 3 =$ ____

- 4



Circle the number that goes with each letter on the number line above.

A: 45 or 42

B: 55 or 59

- 5 What's the missing number?

$$11 - \boxed{} = 5$$

Read the passage. Answer the questions.

Roald Dahl

Roald Dahl wrote lots of fun stories for children. When he was in school, a company called "Cadbury" was nearby. Cadbury workers would often send sweets for the children to taste. This gave Roald Dahl the idea for his book, Charlie and the Chocolate Factory. This book is still a favorite among adults and children today.

- 6 What is the passage mostly about?

- (A) a chocolate factory
(B) a man who wrote books
(C) how to write books

- 7 What did Roald Dahl like to do?

- (A) write books
(B) eat chocolate
(C) draw pictures

- 8 What kind of genre is this passage?

- (A) fantasy
(B) informational text
(C) realistic fiction

- 9 Why is Charlie and the Chocolate Factory a favorite book today?

- (A) It's all about chocolate.
(B) It's about Roald Dahl's life.
(C) It's a fun story.

- 10 Why was this passage written?

- (A) to make you laugh
(B) to help you write your own book
(C) to teach you facts



ar



1. a r ar a ar r ar r ar

2. art jar bar arm tar ark

3. part farm mart park dart Bart

4. chart march charm shark dark
arch market bark marker star

5. mark the chart star on the art

start the car

dark shark

6. I got a star charm at the mart.
Mark will park the car at the farm.
